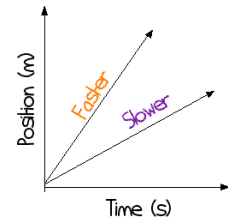


NOTES: POSITION-TIME GRAPHS

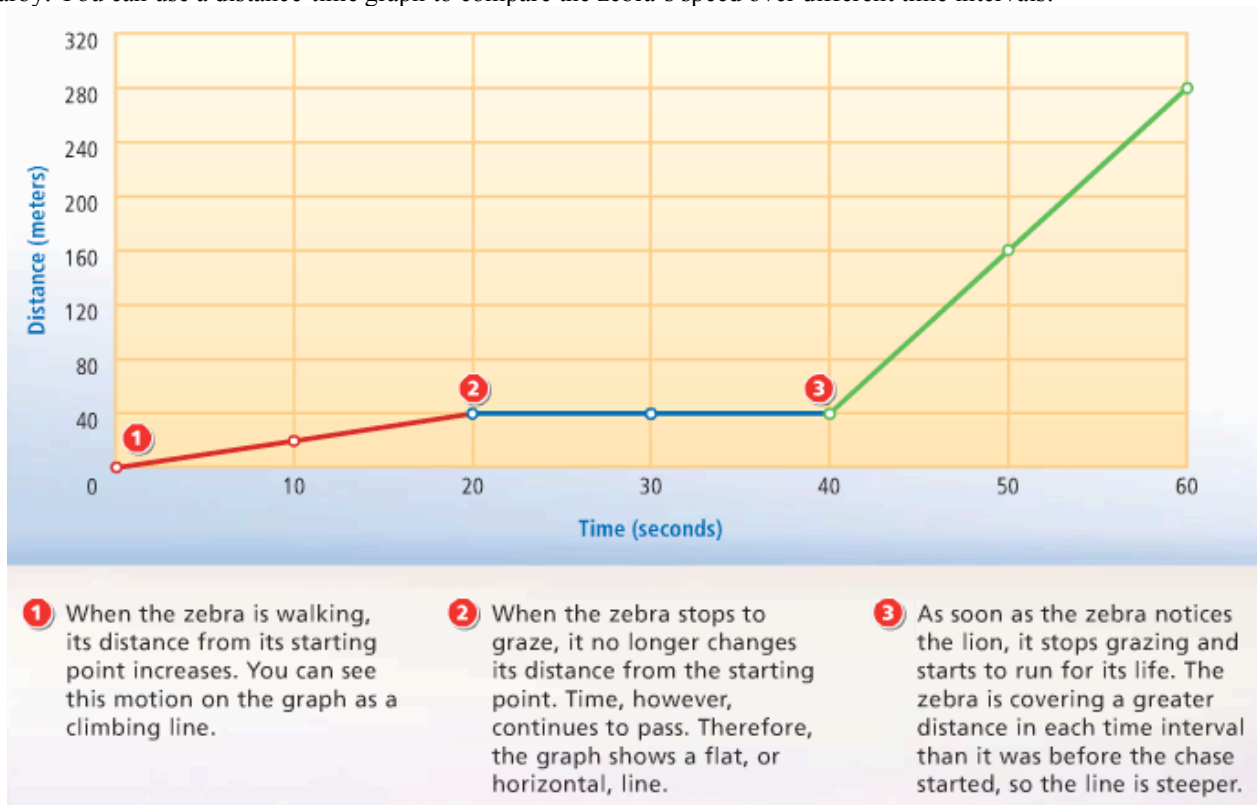
- Show an object's position at a given time
- Position or _____ on _____ -axis
- Time on _____ -axis
- An object moving at a _____ speed creates a _____ line.
- The _____ an object moves, the _____ its slope.
- A flat line means the object's position is _____, or the object has _____.
- A line that slopes downwards means the object is _____.
- Most importantly, these graphs are used to calculate an object's _____.



$$\text{Slope} = \frac{\text{Change in Position}}{\text{Change in Time}}$$

$$\text{Speed} = \frac{\text{Distance}}{\text{Time}}$$

Interpret a Distance-Time Graph: A zebra's speed will change throughout the day, especially if a hungry lion is nearby. You can use a distance-time graph to compare the zebra's speed over different time intervals.

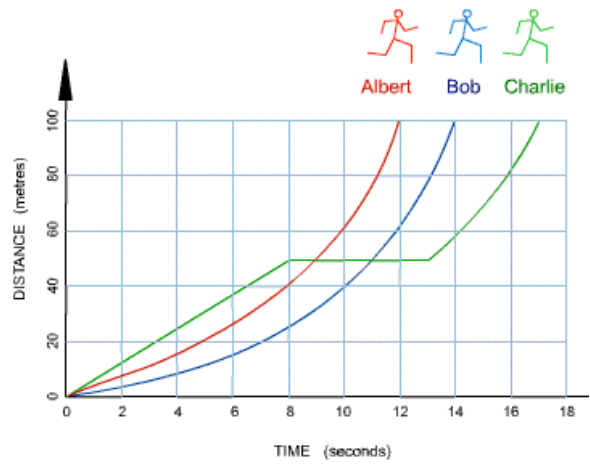


1. How far does the zebra walk in the first 20 seconds? _____
2. How long does the zebra rest for? _____
3. What total distance does the zebra travel? _____
4. During what time interval did the zebra travel the fastest? _____
5. What is the speed of the zebra during the time interval from 0 seconds to 20 seconds? _____
6. What is the speed of the zebra during the time interval from 40 seconds to 60 seconds? _____

Interpret a Distance-Time Graph #2

- Which runner won the race? _____
- Which runner stopped for a rest? _____
- How long did he stop for? _____
- How long did Bob take to complete the track?

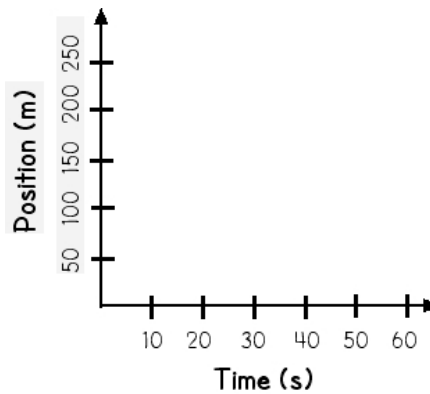
- Calculate Albert's average speed.



Drawing Position-Time Graphs

Your friend is training for a track meet and wants to know if she is running at a constant speed. You mark the track in 50-meter increments record her time. **Create a position-time graph using her data.**

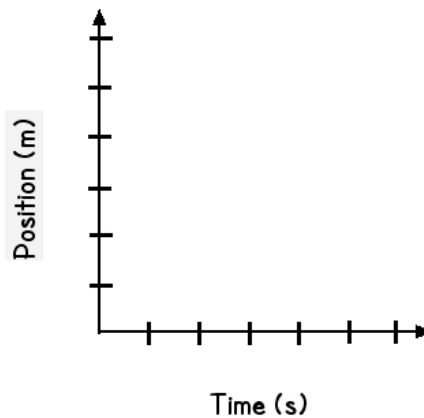
Time (s)	Position (m)
0	0
10	50
20	100
30	150



- What is her average speed?
- Is she running at a constant speed? How do you know?

The data table shows the position and time of Snookie running down the beach. **Make a graph of the data and use it to calculate her speed.**

Time (s)	Position (m)
0	0
2	6
4	9
6	12
8	15
10	18



- What is her average speed?
- Is she running at a constant speed? How do you know?

Interpreting Position-Time Graphs

Without Numbers: Describe the motion of the 3 graphs.

