


# Star Light, Star Bright

Exploring How Stars are Classified *1 pt ec B&W / 2 pts ec if COLOR*



## Part 1: Exploring with Classification

Each group will receive 1 set of 27 stars.

Every star indicates the following: a color, name, temperature, size, and luminosity value.

The luminosity is compared to the sun's luminosity. If a star has a luminosity value of 5, then it is 5 times brighter than our sun. If a star has a luminosity value of 0.1, then it is 1/10 the brightness of our sun. Explore with the stars – spread them out on your tables and try to find 3 different arrangements. Record your data in below.

### Star Arrangement #1

<b>We arranged our stars according to:</b>	
<b>List some observations about this arrangement below:</b>	
1.	
2.	
3.	

### Star Arrangement #2

<b>We arranged our stars according to:</b>	
<b>List some observations about this arrangement below:</b>	
1.	
2.	
3.	

### Star Arrangement #3

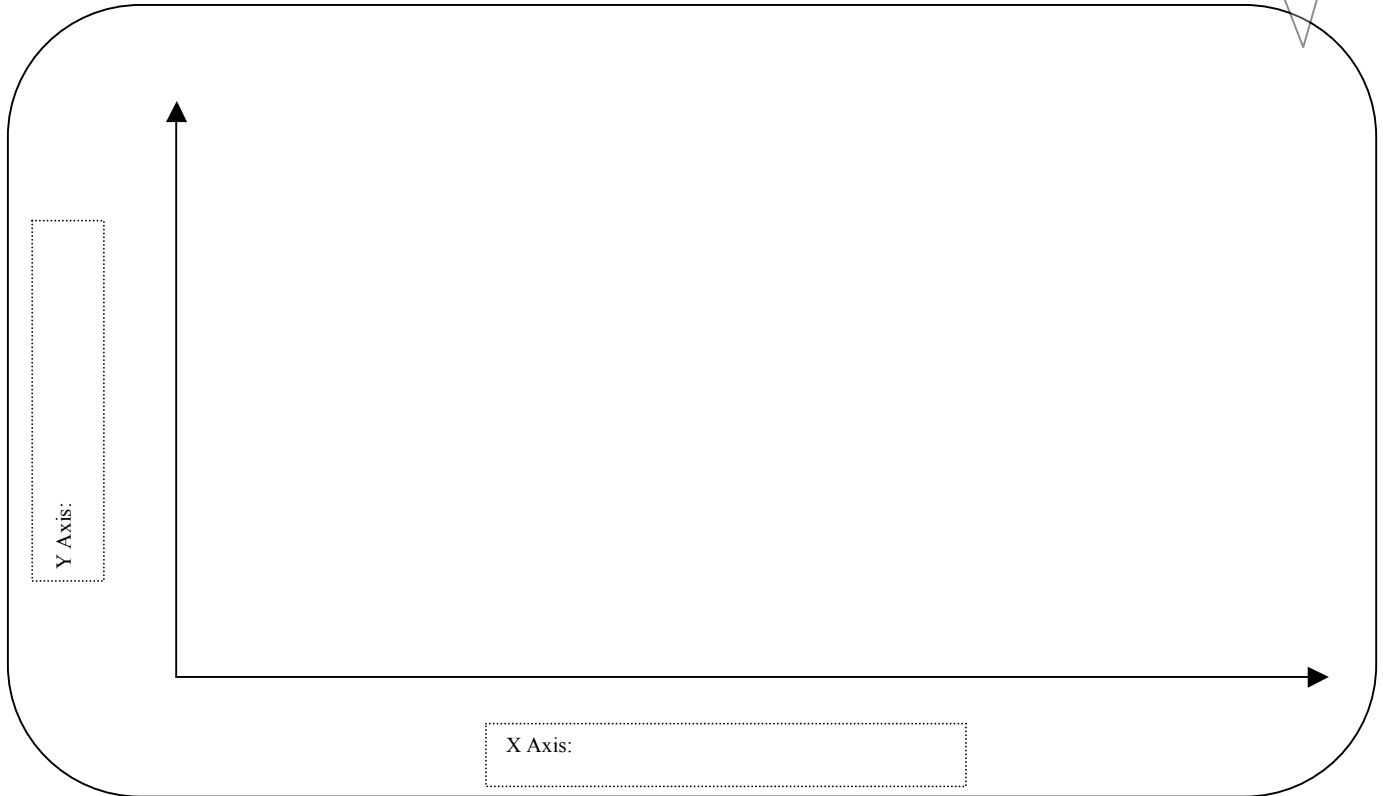
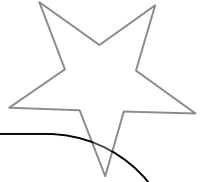
<b>We arranged our stars according to:</b>	
<b>List some observations about this arrangement below:</b>	
1.	
2.	
3.	

Complete the table below. You may need to use a text book. The first row is completed for you!

Name of Special Star	Size	Temperature	Luminosity	Example
<i>Blue Giant</i>	<i>Massive</i>	<i>Really Hot</i>	<i>Really Bright</i>	<i>Naos</i>
Red Giant				
	Small	Hot	Dim	
Supergiant				
Blue Dwarf				
Red Dwarf				

## Part 2: Classification Challenge

- Is there a master way to organize the stars using ALL of this information?
- Using the large whiteboard, try to plot all of your stars. You choose the Y- and X- axis.
- Draw what you came up with in the box below, draw circles & dots to represent the stars.



### Analysis & Conclusion:

1. What can we say about medium sized stars? \_\_\_\_\_  
\_\_\_\_\_
2. What can we say about large stars? \_\_\_\_\_  
\_\_\_\_\_
3. Name a star that is cool and dim: \_\_\_\_\_ temperature? \_\_\_\_\_ luminosity? \_\_\_\_\_
4. Name a star that is cool and bright: \_\_\_\_\_ temperature? \_\_\_\_\_ luminosity? \_\_\_\_\_
5. Name a star that is hot and dim: \_\_\_\_\_ temperature? \_\_\_\_\_ luminosity? \_\_\_\_\_
6. Name a star that is hot and bright: \_\_\_\_\_ temperature? \_\_\_\_\_ luminosity? \_\_\_\_\_
7. What do you think color tells us about temperature? \_\_\_\_\_  
\_\_\_\_\_
8. What do you think temperature tells us about luminosity? \_\_\_\_\_  
\_\_\_\_\_
9. What do you think size tells us about luminosity? \_\_\_\_\_  
\_\_\_\_\_
10. Look at the H-R Diagram in your book on pages 492-493. How does it organize the stars? \_\_\_\_\_  
\_\_\_\_\_  
\_\_\_\_\_



# STAR CLASSIFICATION TABLE

Name	Color	Temperature	Size	Luminosity
Regulus	Blue	20,000	Medium	100
Spica	Blue	30,000	Medium	10,000
Algol	Blue	20,000	Medium	100
Altair	White	9,000	Medium	90
Vega	White	10,000	Medium	100
Achemar	White	10,000	Medium	200
Mizar	White	9,000	Medium	100
Alcor	White	15,000	Medium	10
Sirius	White	15,000	Medium	10
V. Moanen	White	7,000	Small	.0001
Procyon B	White	7,000	Small	.001
Sirius B	White	10,000	Small	.001
Eridani	Yellow	5,000	Medium	1
Polaris	Yellow	6,000	Large	2,000
Procyon	Yellow	6,500	Medium	10
Tau Ceti	Yellow	6,000	Medium	1
Our Sun	Yellow	6,500	Medium	1
Alpha Centauri A	Yellow	6,000	Medium	1
Alpha Centauri B	Orange	5,000	Medium	1
Epsilon	Orange	5,000	Medium	.1
Aldebaran	Orange	5,000	Large	100
Barnard's Star	Red	3,000	Medium	.001
Betelgeuse	Red	3,000	Large	20,000
Antares	Red	3,000	Large	10,000
Mira	Red	3,000	Large	100

Conclusions: Write a 5-7 sentence conclusion about what you learned, and how this experiment helped you to understand the HR Diagram.

---

---

---

---

---

---

---

---

---

---